



I kvadrat-nettet er der 100 felter. Farv det viste tal i plusstykket samme farve som tallet. Nu kan du tælle, hvor mange felter, der IKKE er farvede. Kan du nu selv finde det manglende tal? I de sidste 3 opgaver kan du prøve med dine egne tal.

LÆR OM
100'er-venner 1
MED MATTIP


$23 + \underline{\quad} = 100$



$\underline{\quad} + 46 = 100$




$\underline{\quad} + 57 = 100$




Hurra for 100!


$\underline{\quad} + 62 = 100$




$11 + \underline{\quad} = 100$




$\underline{\quad} + 79 = 100$



$\underline{\quad} + \underline{\quad} = 100$



$\underline{\quad} + \underline{\quad} = 100$



$\underline{\quad} + \underline{\quad} = 100$

