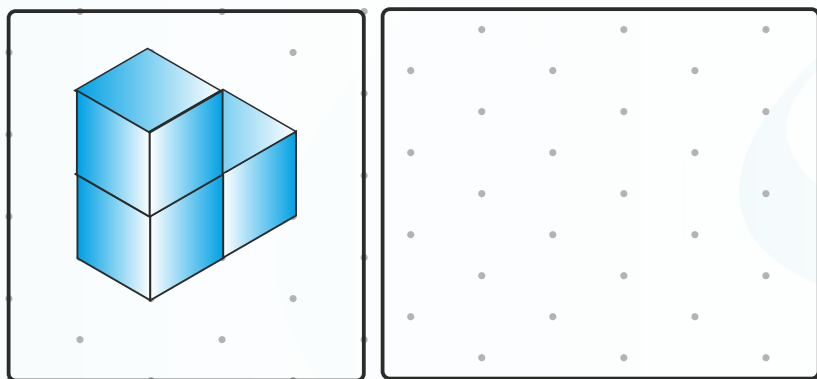



1. Tegn magen til og farv.

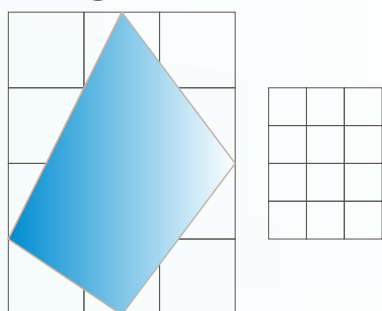


2. Sæt visere på uret.



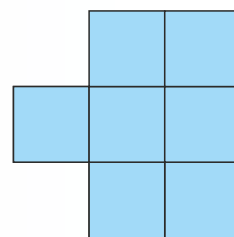
10:00

3. Tegn halvt så stort.






4. Arealet af den blå figur: _____ cm²

5. Omkreds af den blå figur: _____ cm



I hvilke felter finder du ...?

5					
4					
3					
2					
1					
	A	B	C	D	E

8.  _____

9.  _____

10.  _____ og _____



Sæt >, < eller =

6. 28 12 + 15

7. 14 7 + 7

11. 326 + 110 = _____

12. 82 - 22 = _____

13. 4 + 20 + 35 = _____

100 mindre og 100 mere:

14.

	464	
--	-----	--

15.

	109	
--	-----	--