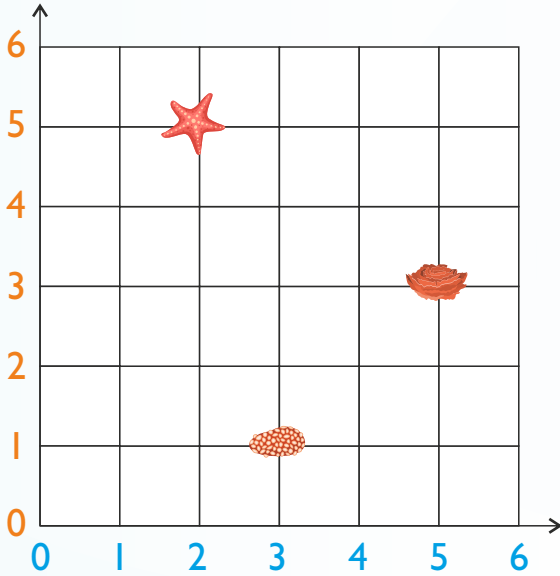



Skriv koordinaterne til ...




1.  (     ,      )

2.  (     ,      )

3.  (     ,      )

4. Sæt visere på uret.



11:30

9. Tegn stregerne ...

12 cm



6 cm





5.  $301 + 99 = \underline{\hspace{2cm}}$


6.  $220 - 80 = \underline{\hspace{2cm}}$

7.  $39 + 28 - 8 = \underline{\hspace{2cm}}$

8. Hvad er værdien?

 + 12 = 20

 =     


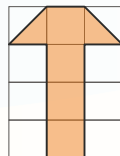


10. 20 mm =      cm

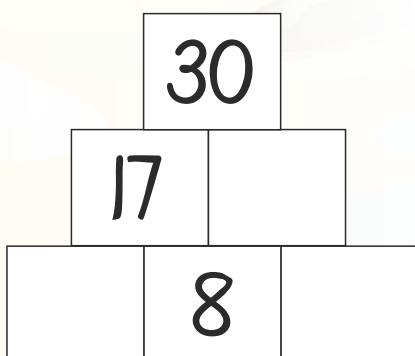
11. 1 kg =      gram

12. 60 sek. =      min.

13. Tegn dobbelt så stort.



14. Løs pluspyramiden.



15. Hvad er værdien?

 - 8 = 4

 =