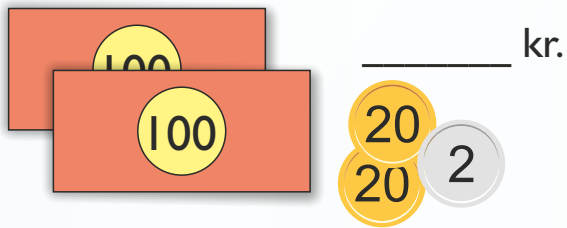


1. Hvor mange penge er der?



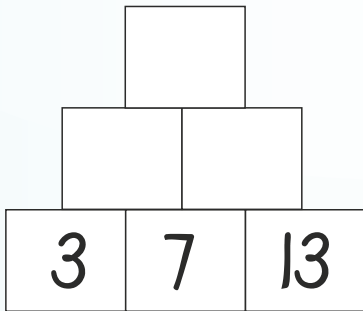
2.  $34 + 7 =$  \_\_\_\_\_

3.  $30 - 15 =$  \_\_\_\_\_

4.  $6 + 6 + 6 =$  \_\_\_\_\_



5. Løs pluspyramiden.



I før og I efter ...

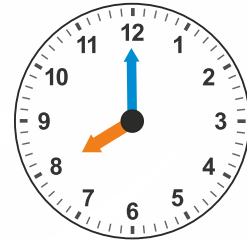
6. 

	79	
--	----	--

7. 

	109	
--	-----	--

8. Hvad er klokken?




:

9. Hvad er klokken?

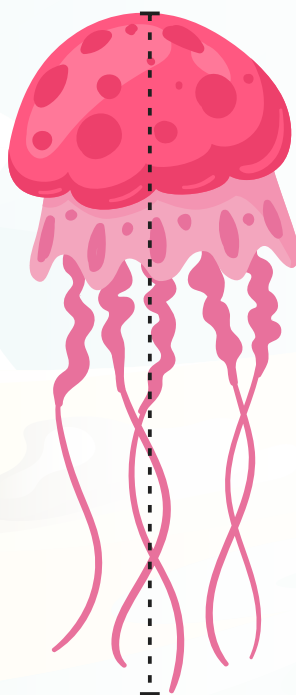


:

Hvor lange er hav-dyrene?



10. \_\_\_\_\_ cm



11. \_\_\_\_\_ cm

12. 1 kr. = \_\_\_\_\_ øre

13. 1 time = \_\_\_\_\_ min.

14. 1 meter = \_\_\_\_\_ cm

15. Farv og regn, så det passer.

17 + \_\_\_\_\_ = 50
