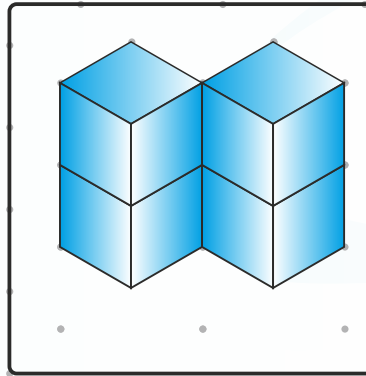


1. $244 + 38 =$ _____

2. $101 - 49 =$ _____


3. $23 + 12 - 5 =$ _____

4. Tegn magen til og farv.



5. 3 meter = _____ cm

6. 1 km = _____ meter




Skriv som gangestykker med facit.

7. $4 + 4 + 4 + 4 =$ _____ \cdot _____ $=$ _____

8. $3 + 3 + 3 + 3 + 3 =$ _____ \cdot _____ $=$ _____

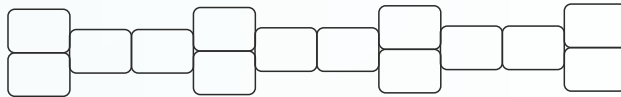
9. Sæt visere på uret.



02:30



10. Farv halvdelen.

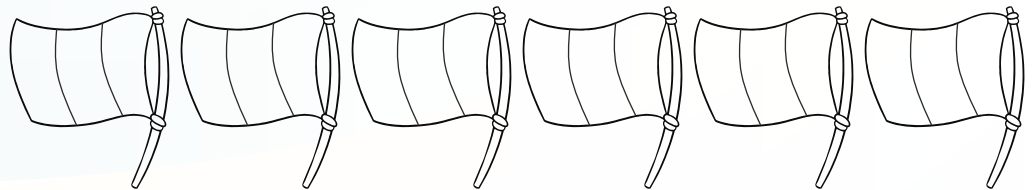


11. Hvad er værdien?

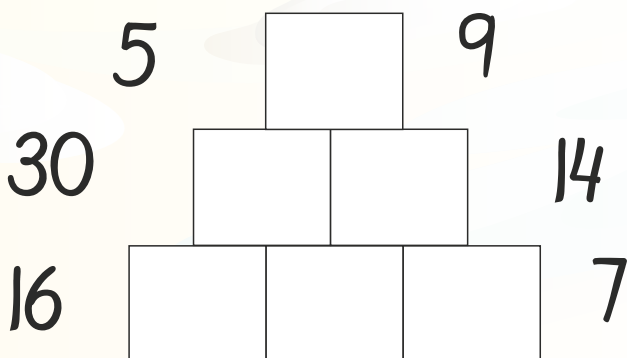
 + 13 = 25

 = _____

12. Vælg tre farver - en til hvert felt.
Kan du farve 6 forskellige flag?



13. Indsæt tallene i plus-pyramiden.



100 mindre og 100 mere.

14.

	342	
--	------------	--

15.

	909	
--	------------	--

