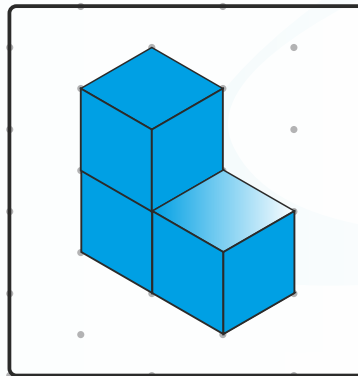


1.  $16 + 44 = \underline{\hspace{2cm}}$


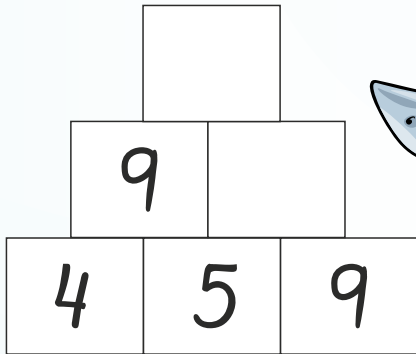
2.  $32 - 15 = \underline{\hspace{2cm}}$

3.  $6 + 12 - 4 = \underline{\hspace{2cm}}$

4. Tegn magen til og farv.



5. Løs pluspyramiden.




Plus, minus eller gange?  
Indsæt det rigtige symbol i kassen.

6.  $29 \square 14 = 43$

7.  $2 \square 15 = 30$

8.  $60 \square 20 = 40$





9. Farv halvdelen:




10. Hvad er søhestenes værdi?


 +  = 8

 =           

 -  = 16

 =           

11. Sæt visere på uret.



04:30

12.  $8 \text{ cm} = \underline{\hspace{2cm}} \text{ mm}$

13.  $2 \text{ min.} = \underline{\hspace{2cm}} \text{ sek.}$

14.  $200 \text{ cm} = \underline{\hspace{2cm}} \text{ m}$

15. Sæt streger til tallinjen.

30    70    120    90

