


Skriv 3-tabellen.

3-tabellen

Tegn og udregn gangestykkerne.


 • 3 =




 • 5 =




\_\_\_\_\_

 • 3 =



\_\_\_\_\_

 • 8 =



\_\_\_\_\_

Udregn gangestykkerne.

5•3 = \_\_\_\_\_

7•3 = \_\_\_\_\_

3•3 = \_\_\_\_\_

9•3 = \_\_\_\_\_

3•6 = \_\_\_\_\_

1•3 = \_\_\_\_\_

3•2 = \_\_\_\_\_

3•7 = \_\_\_\_\_

8•3 = \_\_\_\_\_

3•2 = \_\_\_\_\_

4•3 = \_\_\_\_\_

10•3 = \_\_\_\_\_

3•9 = \_\_\_\_\_

3•8 = \_\_\_\_\_

3•5 = \_\_\_\_\_

3•3 = \_\_\_\_\_

