

1 Regn stykkerne og indsæt det rigtige resultat.

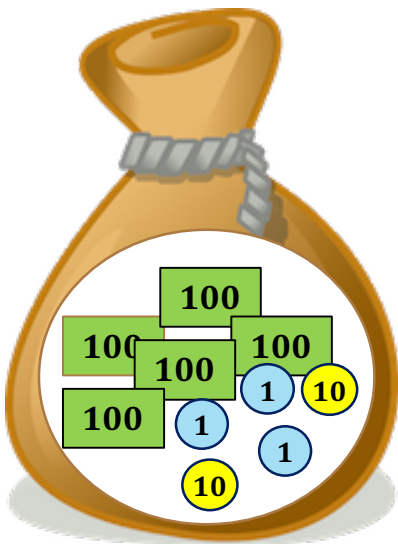
90 50 110 51 39 100 62 94 81

$43 + 8 = \underline{\quad}$        $33 + 6 = \underline{\quad}$        $30 + 20 = \underline{\quad}$

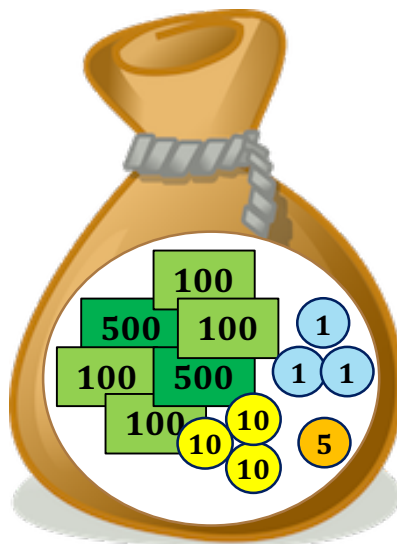
$57 + 5 = \underline{\quad}$        $87 + 7 = \underline{\quad}$        $90 + 20 = \underline{\quad}$

$75 + 6 = \underline{\quad}$        $84 + 6 = \underline{\quad}$        $70 + 30 = \underline{\quad}$

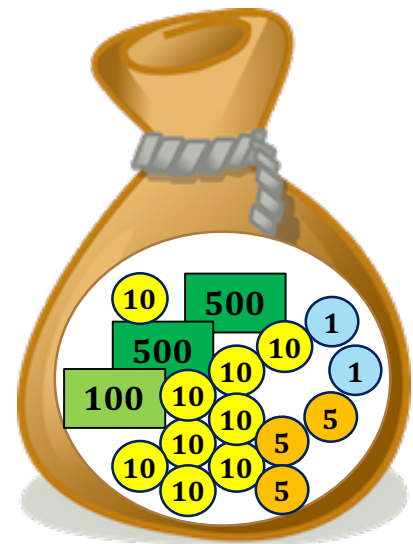
2 Hvor mange penge er der i sækken?



\_\_\_\_\_ kr.



\_\_\_\_\_ kr.



\_\_\_\_\_ kr.

3 Skal der stå  $>$   $<$  eller  $=$  i stykket?

$9 + 45 \square 3 + 12$

$18 + 24 \square 16 + 25$

$12 + 13 \square 5 + 20$

$31 + 15 \square 17 + 16$

$6 + 12 \square 3 + 17$

$24 + 34 \square 25 + 29$

