




1 Hvor mange er der i hver kasse?



= _____



= _____



= _____

2 Læg tallene sammen.

$3 + 3 = \underline{\quad}$

$3 + 6 = \underline{\quad}$

$4 + 5 = \underline{\quad}$

$6 + 3 = \underline{\quad}$

$7 + 2 = \underline{\quad}$

$1 + 7 = \underline{\quad}$

$3 + 2 = \underline{\quad}$

$8 + 2 = \underline{\quad}$

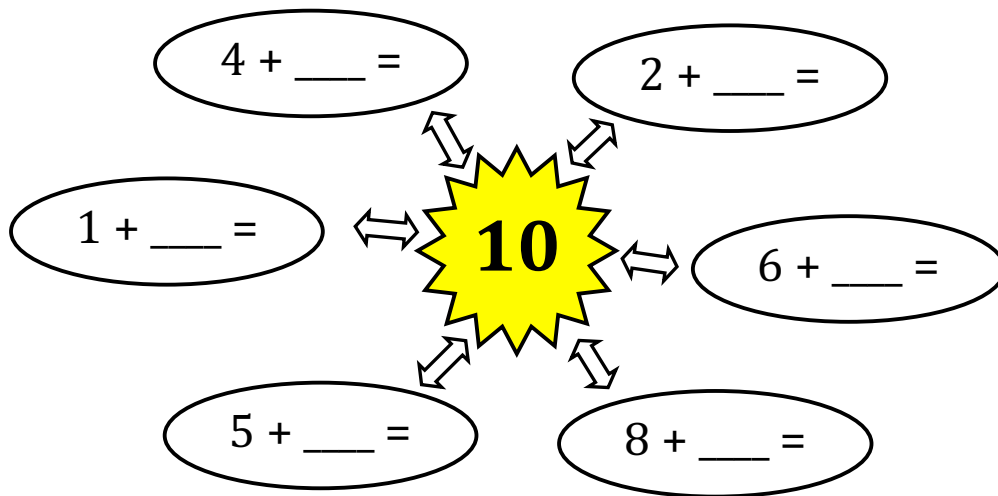
$5 + 3 = \underline{\quad}$

$4 + 2 = \underline{\quad}$

$9 + 1 = \underline{\quad}$

$4 + 4 = \underline{\quad}$

3 Lav plusstykker, der giver resultatet 10.




4 Hvad koster slikket?

$+ = \underline{\quad} \text{ kr.}$

$+ = \underline{\quad} \text{ kr.}$

$+ = \underline{\quad} \text{ kr.}$



5 kr.



4 kr.



3 kr.

