




1 Hvor mange er der i hver kasse?



= \_\_\_\_\_



= \_\_\_\_\_















= \_\_\_\_\_

I alt:

= \_\_\_\_\_

2 Løs plusstykkerne.

					
1	2	3	4	5	6
					
7	8	9	10	11	12

$$\text{Sheep} + \text{Sheep} + \text{Sheep} = \underline{\hspace{2cm}}$$

$$\text{Elephant} + \text{Tiger} + \text{Penguin} = \underline{\hspace{2cm}}$$

$$\text{Pig} + \text{Pig} + \text{Tiger} = \underline{\hspace{2cm}}$$

$$\text{Donkey} + \text{Donkey} + \text{Walrus} = \underline{\hspace{2cm}}$$

$$\text{Monkey} + \text{Snake} + \text{Sheep} = \underline{\hspace{2cm}}$$

$$\text{Elephant} + \text{Monkey} + \text{Snail} = \underline{\hspace{2cm}}$$

$$\text{Penguin} + \text{Walrus} = \underline{\hspace{2cm}}$$

$$\text{Zebra} + \text{Donkey} = \underline{\hspace{2cm}}$$

$$\text{Elephant} + \text{Zebra} = \underline{\hspace{2cm}}$$

$$\text{Snake} + \text{Seal} = \underline{\hspace{2cm}}$$

$$\text{Walrus} + \text{Pig} = \underline{\hspace{2cm}}$$

$$\text{Snake} + \text{Snake} = \underline{\hspace{2cm}}$$