




1 Hvor mange er der i hver kasse?



= _____



= _____



= _____

2 Læg tallene sammen.

$3 + 6 = \underline{\quad}$

$13 + 6 = \underline{\quad}$

$10 + 20 = \underline{\quad}$

$7 + 2 = \underline{\quad}$

$11 + 7 = \underline{\quad}$

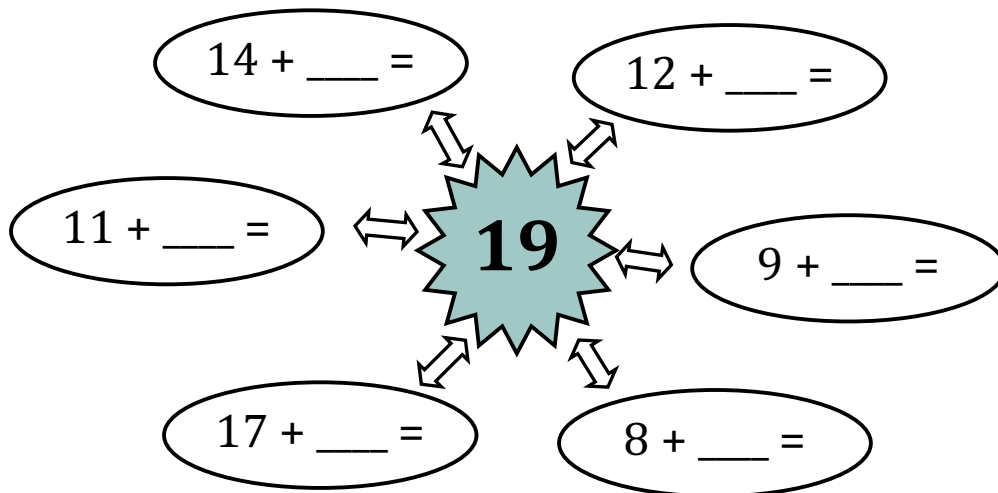
$30 + 20 = \underline{\quad}$

$5 + 3 = \underline{\quad}$

$14 + 6 = \underline{\quad}$

$40 + 30 = \underline{\quad}$

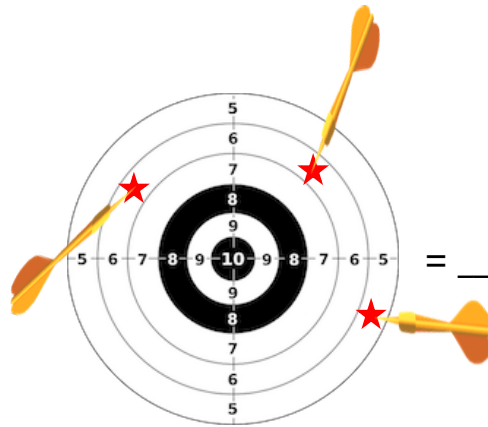
3 Lav plusstykker, der giver resultatet 19.



4 Hvor mange point?



= _____



= _____

