


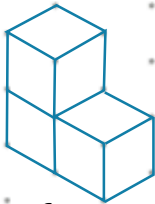
1 Tegn figurer magen til og beregn figurens rumfang.




Rumfang = _____ cm^3



Rumfang = _____ cm^3




Rumfang = _____ cm^3




Rumfang = _____ cm^3


2 Tegn en figur med et rumfang på:



6 cm^3



12 cm^3



8 cm^3

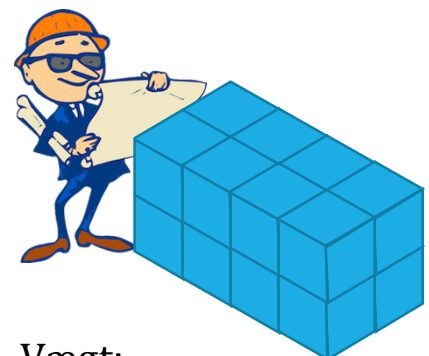
3 Viggo har købt nogle kasser. Hvor meget vejer alle kasserne, hvis én blå kasse vejer 9 kilo?



Vægt: _____



Vægt: _____



Vægt: _____