
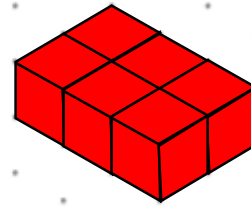
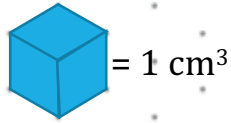


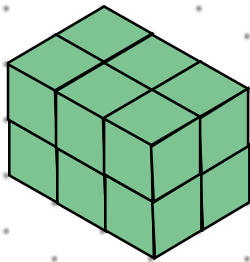
1 Tegn figurer magen til og beregn figurens rumfang.



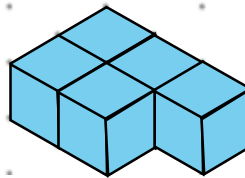
Rumfang = _____ cm^3



Rumfang = _____ cm^3

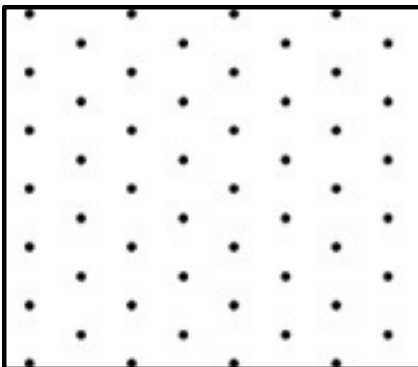


Rumfang = _____ cm^3

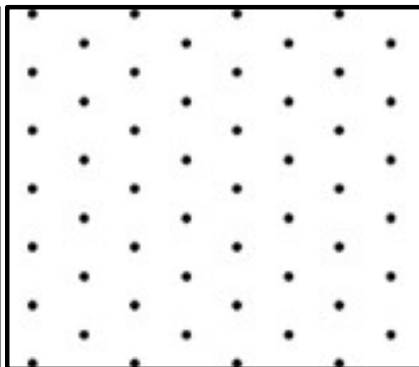


Rumfang = _____ cm^3

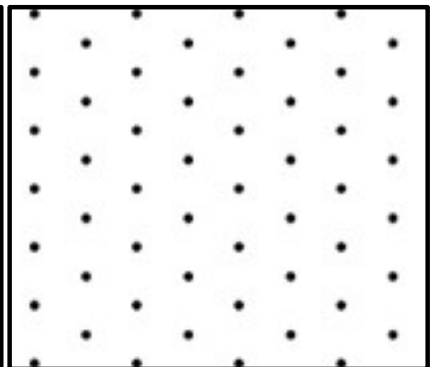
2 Tegn en figur med et rumfang på:



5 cm^3




7 cm^3




9 cm^3


3 Viggo har købt nogle kasser. Hvor meget vejer alle kasserne, hvis én kasse vejer 7 kilo?



Vægt: _____



Vægt: _____



Vægt: _____

