


# Geometri 15

Find areal og omkreds af figurerne herunder.



Omkreds: \_\_\_\_\_ cm

Areal: \_\_\_\_\_ cm<sup>2</sup>




Omkreds: \_\_\_\_\_ cm

Areal: \_\_\_\_\_ cm<sup>2</sup>



Omkreds: \_\_\_\_\_ cm

Areal: \_\_\_\_\_ cm<sup>2</sup>



Omkreds: \_\_\_\_\_ cm

Areal: \_\_\_\_\_ cm<sup>2</sup>



Omkreds: \_\_\_\_\_ cm

Areal: \_\_\_\_\_ cm<sup>2</sup>



Omkreds: \_\_\_\_\_ cm

Areal: \_\_\_\_\_ cm<sup>2</sup>


# Geometri 16

Find areal og omkreds af figurerne herunder.



Omkreds: \_\_\_\_\_ cm

Areal: \_\_\_\_\_ cm<sup>2</sup>



Omkreds: \_\_\_\_\_ cm

Areal: \_\_\_\_\_ cm<sup>2</sup>




Omkreds: \_\_\_\_\_ cm

Areal: \_\_\_\_\_ cm<sup>2</sup>




Omkreds: \_\_\_\_\_ cm

Areal: \_\_\_\_\_ cm<sup>2</sup>



Omkreds: \_\_\_\_\_ cm

Areal: \_\_\_\_\_ cm<sup>2</sup>



Omkreds: \_\_\_\_\_ cm

Areal: \_\_\_\_\_ cm<sup>2</sup>

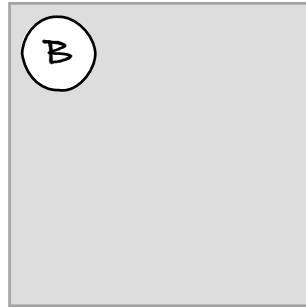
# Geometri 17

Find areal og omkreds af figurerne herunder.



Omkreds: \_\_\_\_\_ cm

Areal: \_\_\_\_\_ cm<sup>2</sup>




Omkreds: \_\_\_\_\_ cm

Areal: \_\_\_\_\_ cm<sup>2</sup>




Omkreds: \_\_\_\_\_ cm

Areal: \_\_\_\_\_ cm<sup>2</sup>



Omkreds: \_\_\_\_\_ cm

Areal: \_\_\_\_\_ cm<sup>2</sup>




Omkreds: \_\_\_\_\_ cm

Areal: \_\_\_\_\_ cm<sup>2</sup>



Omkreds: \_\_\_\_\_ cm

Areal: \_\_\_\_\_ cm<sup>2</sup>



Omkreds: \_\_\_\_\_ cm

Areal: \_\_\_\_\_ cm<sup>2</sup>