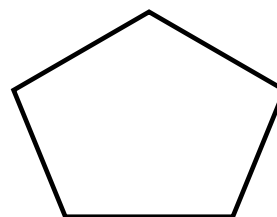
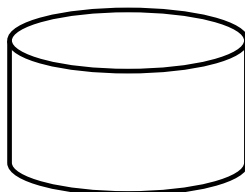


Geometri 3

Elevark

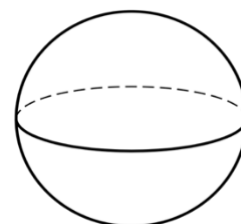

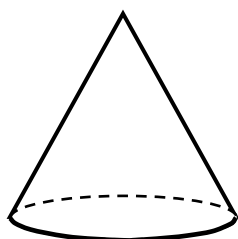
Her ser du forskellige figurer, både i 2- og 3D. Skriv det rigtige navn under hver figur og streg det derefter i kassen i bunden:



Navn: _____

Navn: _____

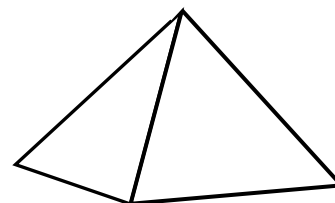
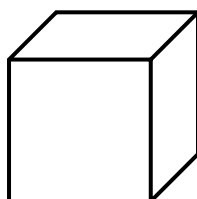
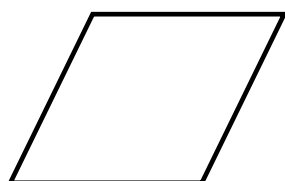
Navn: _____



Navn: _____

Navn: _____


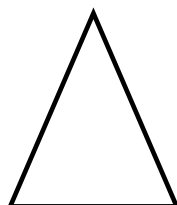
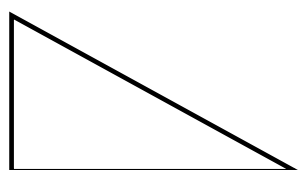
Navn: _____



Navn: _____

Navn: _____

Navn: _____



Navn: _____

Navn: _____

Navn: _____

kube - ligebenet trekant - pyramide - kvadrat - cylinder - kugle (sfære) -
retvinklet trekant - rektangel - parallelogram - cirkel - pentagon - kegle