

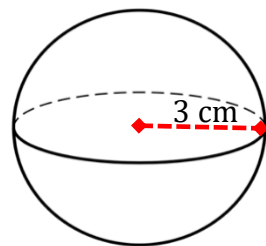
Geometri 5

Find overfladearealet og rumfanget af disse figurer. Gå på nettet for at finde formlerne, hvis du ikke har dem i din formelsamling.

Kugle

Overfladeareal: _____ = _____ cm^2

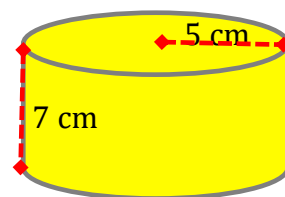
Rumfang: _____ = _____ cm^3



Cylinder

Overfladeareal: _____ = _____ cm^2

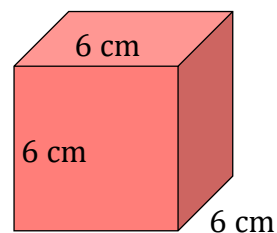
Rumfang: _____ = _____ cm^3



Kasse

Overfladeareal: _____ = _____ cm^2

Rumfang: _____ = _____ cm^3



Kegle

Overfladeareal: _____ = _____ cm^2

Rumfang: _____ = _____ cm^3

