

Hvor mange af hver?


Tæl antal og sæt ring om det rigtige tal.


TÆL


Hvor mange af hver?


2 A


MED MATTIP


| | |
|---|----|
|  | 13 |
| | 14 |
| | 15 |
| | 16 |


| | |
|--|---|
|  | 7 |
| | 6 |
| | 9 |
| | 8 |


| | |
|--|----|
|  | 9 |
| | 10 |
| | 11 |
| | 12 |

| | |
|---|----|
|  | 17 |
| | 18 |
| | 16 |
| | 19 |

| | |
|---|---|
|  | 9 |
| | 8 |
| | 7 |
| | 6 |

| | |
|--|----|
|  | 17 |
| | 18 |
| | 16 |
| | 15 |

| | |
|---|---|
|  | 8 |
| | 6 |
| | 9 |
| | 7 |

| | |
|--|----|
|  | 13 |
| | 14 |
| | 16 |
| | 15 |

Hvor mange af hver?


Tæl antal og sæt ring om det rigtige tal.


TÆL


Hvor mange af hver?


2 B


MED MATTIP


| | |
|---|----|
|  | 17 |
| | 18 |
| | 19 |
| | 20 |


| | |
|--|---|
|  | 7 |
| | 6 |
| | 9 |
| | 8 |


| | |
|--|---|
|  | 3 |
| | 6 |
| | 4 |
| | 5 |

| | |
|---|----|
|  | 12 |
| | 13 |
| | 14 |
| | 15 |

| | |
|---|---|
|  | 9 |
| | 8 |
| | 7 |
| | 6 |

| | |
|--|----|
|  | 19 |
| | 20 |
| | 18 |
| | 17 |

| | |
|---|----|
|  | 13 |
| | 14 |
| | 16 |
| | 12 |

| | |
|--|----|
|  | 9 |
| | 12 |
| | 10 |
| | 11 |