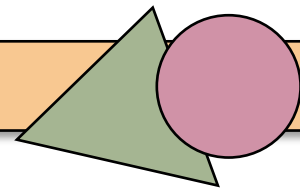
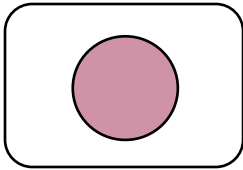


# Kan du finde geometriske figurer?

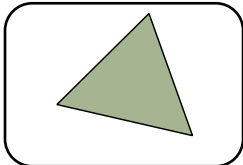


Find en ting, der ...

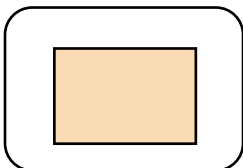
Tegn tingen og skriv hvilken ting, det er:




er rund



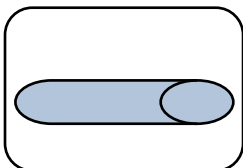
er trekantet



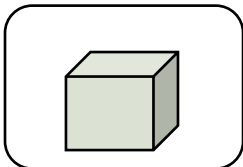
er firkantet



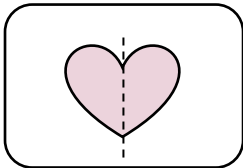
er aflang



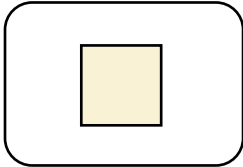
er rund og aflang



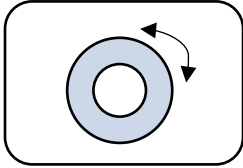
er kasseformet



har en spejlingsakse



har 4 lige lange sider



kan drejes