




Streg væk, så det passer til minusstykket. Hvor mange er tilbage?


LÆR OM
Minusbolde A
(max: 30)
MED MATTIP

 $17 - 3 =$


 $16 - 7 =$


 $19 - 10 =$

 $13 - 8 =$


 $25 - 24 =$


 $15 - 3 =$


 $28 - 28 =$


 $26 - 2 =$

 $18 - 6 =$

 $23 - 7 =$


 $29 - 9 =$

 $23 - 19 =$

 $21 - 20 =$

 $18 - 7 =$

 $17 - 5 =$

 $29 - 20 =$

