


1 Lav først som plus - derefter som gange.




$$\underline{\quad} + \underline{\quad} + \underline{\quad} = \underline{\quad}$$

$$\underline{\quad} \cdot \underline{\quad} = \underline{\quad}$$




$$\underline{\quad} + \underline{\quad} = \underline{\quad}$$

$$\underline{\quad} \cdot \underline{\quad} = \underline{\quad}$$



$$\underline{\quad} + \underline{\quad} + \underline{\quad} + \underline{\quad} = \underline{\quad}$$

$$\underline{\quad} \cdot \underline{\quad} = \underline{\quad}$$



$$\underline{\quad} + \underline{\quad} + \underline{\quad} + \underline{\quad} + \underline{\quad} + \underline{\quad} = \underline{\quad}$$

$$\underline{\quad} \cdot \underline{\quad} = \underline{\quad}$$



$$\underline{\quad} + \underline{\quad} + \underline{\quad} = \underline{\quad}$$

$$\underline{\quad} \cdot \underline{\quad} = \underline{\quad}$$



$$\underline{\quad} + \underline{\quad} + \underline{\quad} + \underline{\quad} + \underline{\quad} + \underline{\quad} + \underline{\quad} = \underline{\quad}$$

$$\underline{\quad} \cdot \underline{\quad} = \underline{\quad}$$

2 Udregn gangestykket - hvor mange fugle er der?



$$\underline{\quad} \cdot \underline{\quad} = \underline{\quad}$$



$$\underline{\quad} \cdot \underline{\quad} = \underline{\quad}$$




$$\underline{\quad} \cdot \underline{\quad} = \underline{\quad}$$



$$\underline{\quad} \cdot \underline{\quad} = \underline{\quad}$$

3 Tegn selv et gangestykke, der passer i kasserne:



$$3 \cdot \underline{\quad} = \underline{\quad}$$

