

1 Regn gangestykkerne.

$6 \cdot 6 = \underline{\quad}$

$5 \cdot 8 = \underline{\quad}$

$7 \cdot 4 = \underline{\quad}$

$3 \cdot 9 = \underline{\quad}$

$3 \cdot 5 = \underline{\quad}$

$2 \cdot 3 = \underline{\quad}$


$7 \cdot 2 = \underline{\quad}$

$7 \cdot 7 = \underline{\quad}$

$6 \cdot 8 = \underline{\quad}$


2 Hvad koster tingene i alt?

Pr. stk. 2 kr.




kr.

Pr. stk. 6 kr.



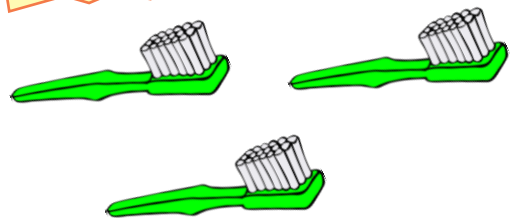
kr.

Pr. stk. 9 kr.



kr.

Pr. stk. 8 kr.




kr.

Pr. stk. 3 kr.



kr.

Pr. stk. 10 kr.



kr.