


Tæl sæderne lodret og vandret.
Gang derefter tallene med hinanden.

Hvor mange sæder er der i hver sal?




REGN
**Multiplikation
i biografen 1**
MED MATTIP

SAL 1



lærred

SAL 2




lærred


a) $_ \cdot _ = _$



b) $_ \cdot _ = _$




SAL 3



lærred

SAL 4



lærred

c) $_ \cdot _ = _$

d) $_ \cdot _ = _$