

Procent 1

Opgave 1


Farv det antal felter, der svarer til procenttallet:

Blå: 40%

Gul: 25%

Rød: 15%

Hvor mange procent er ikke farvet? _____%




Blå: 17%

Gul: 25%

Rød: 31%

Hvor mange procent er ikke farvet? _____%



Opgave 2

Skriv det rigtige procenttal ud for brøkerne:

a) $\frac{50}{100} = \text{_____}\%$

b) $\frac{17}{100} = \text{_____}\%$

c) $\frac{77}{100} = \text{_____}\%$

d) $\frac{120}{100} = \text{_____}\%$

e) $\frac{530}{100} = \text{_____}\%$

f) $\frac{5120}{100} = \text{_____}\%$

g) $\frac{2}{100} = \text{_____}\%$

h) $\frac{9}{100} = \text{_____}\%$

i) $\frac{10}{100} = \text{_____}\%$

j) $\frac{2}{10} = \text{_____}\%$

k) $\frac{9}{10} = \text{_____}\%$


l) $\frac{12}{10} = \text{_____}\%$

Opgave 3

Farv de tre kvadrater efter følgende anvisning:


A

$\frac{23}{100}$ rødt; $\frac{54}{100}$ gult; $\frac{23}{100}$ blåt




B

$\frac{14}{100}$ rødt; $\frac{12}{100}$ gult; $\frac{\text{resten}}{100}$ blåt



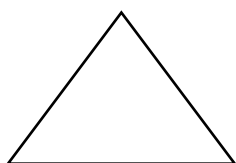
C

$\frac{2}{10}$ rødt; $\frac{40}{100}$ gult; $\frac{4}{10}$ blåt

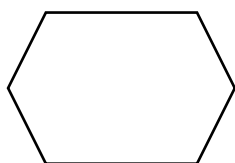


Opgave 4


Farv figurerne som beskrevet i procent:



50 % grå



25 % grå



30 % grå

