

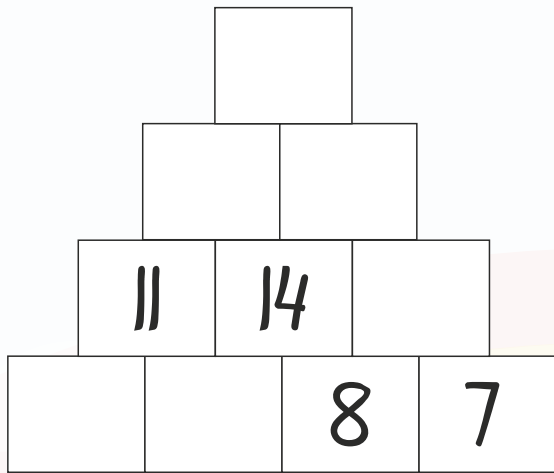
# REGN-BUEN 7



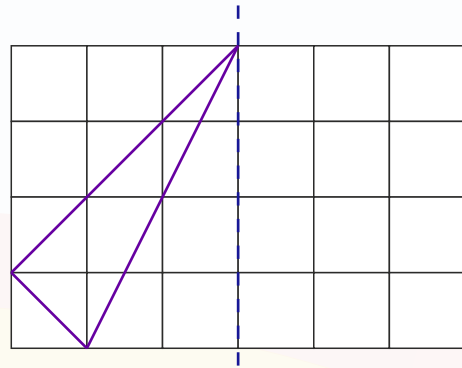
Navn: \_\_\_\_\_



1. Løs pluspyramiden.



10. Spejl figuren.




2. 2 meter = \_\_\_\_\_ cm

3. 50 mm = \_\_\_\_\_ cm

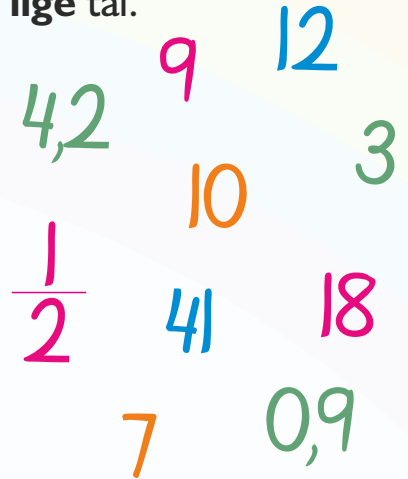
4. 1 time = \_\_\_\_\_ min.

5. 1/2 time = \_\_\_\_\_ min.

11. Del i fire lige store dele.



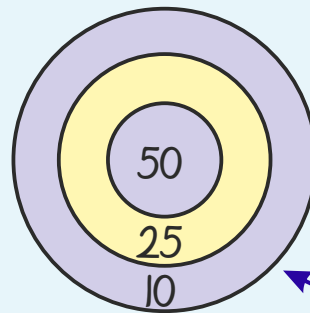
12. Sæt ring om alle lige tal.



6.  $70 + 30 + 15 =$  \_\_\_\_\_

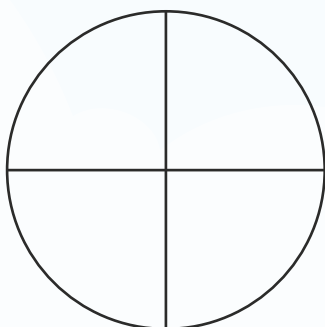
7.  $56 + 33 - 14 =$  \_\_\_\_\_

8.  $2 \cdot 2 \cdot 2 =$  \_\_\_\_\_




13. Lav 135 point med færrest mulige skud.

9. Farv  $\frac{3}{4}$  af figuren.



14. Mål stregernes samlede længde.



Fortsæt talrækken.

15. 

-2		0	1		
----	--	---	---	--	--



Point