

# REGN-BUEN 2




Navn: \_\_\_\_\_

1.  $43 + 18 =$  \_\_\_\_\_

2.  $56 - 25 =$  \_\_\_\_\_

3.  $9 \cdot 5 =$  \_\_\_\_\_

Se på figuren og find:



9. Arealet = \_\_\_\_\_  $\text{cm}^2$

10. Omkredsen = \_\_\_\_\_  $\text{cm}$

Hvad er det halve?  
Og det halve igen?



4.  $32 \rightarrow$  \_\_\_\_\_  $\rightarrow$  \_\_\_\_\_

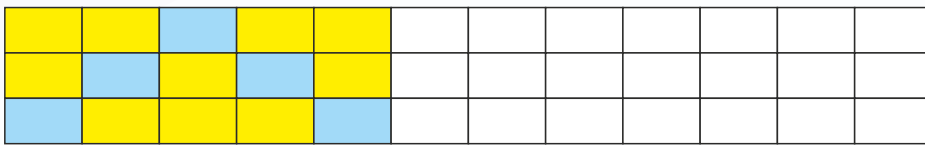
5.  $84 \rightarrow$  \_\_\_\_\_  $\rightarrow$  \_\_\_\_\_



11. Skriv tallene fra 3-tabellen.

\_\_\_\_\_

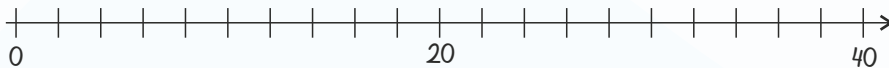
6. Fortsæt mønstret.



12. Tegn et kvadrat på  $2 \cdot 2 \text{ cm}$ :

7. Sæt streger til tallinjen.

10   18   4   28   36


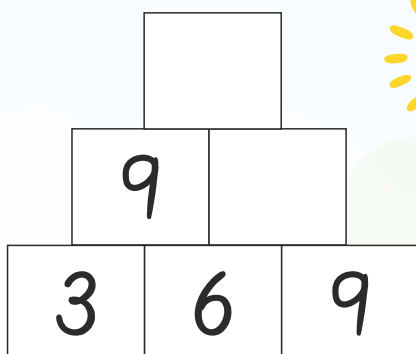


Hvad skal der stå, for at stykkerne passer?

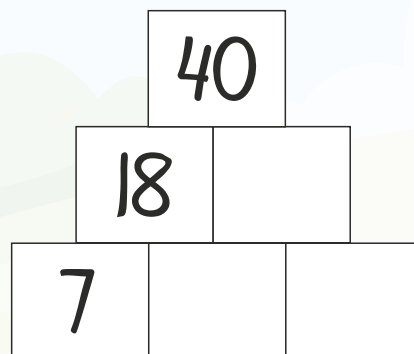
13. \_\_\_\_\_  $5 + 2$  \_\_\_\_\_ = 55

14.  $1$  \_\_\_\_\_ + \_\_\_\_\_  $8 = 35$

8. Løs pluspyramiden.



15. Løs pluspyramiden.



Point