

Indsæt det tal, der mangler:

$15 - \underline{\quad\quad} = 2$

$10 - \underline{\quad\quad} = 2$

$40 - \underline{\quad\quad} = 6$

$20 - \underline{\quad\quad} = 8$

$50 - \underline{\quad\quad} = 15$

$60 - \underline{\quad\quad} = 30$

$10 - \underline{\quad\quad} = 3$

$80 - \underline{\quad\quad} = 20$













$57 - \underline{\quad\quad} = 7$


$25 - \underline{\quad\quad} = 5$


$55 - \underline{\quad\quad} = 5$


$77 - \underline{\quad\quad} = 7$


Tegn den figur, der mangler:


					
100	90	80	70	60	50
					
40	30	20	15	10	5


 — = 10


 — = 5


 — = 80

 — = 20

 — = 30

 — = 50

 — = 20

 — = 35

