

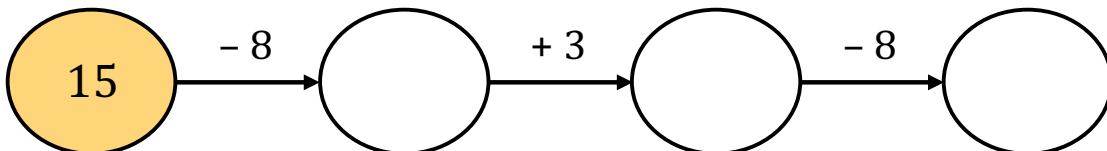
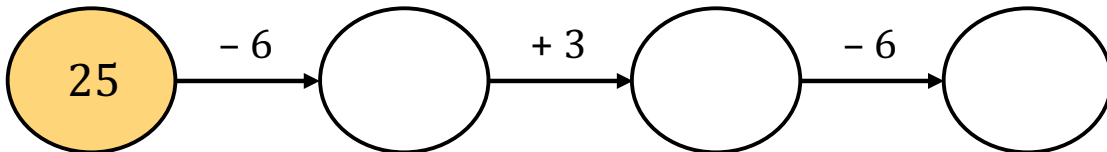
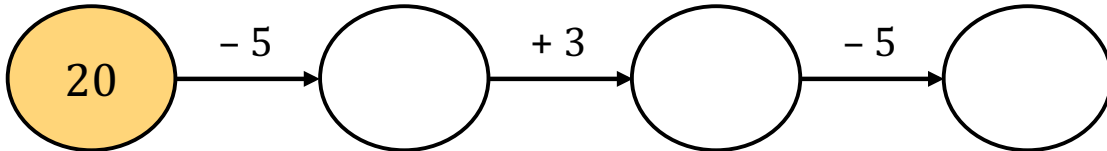
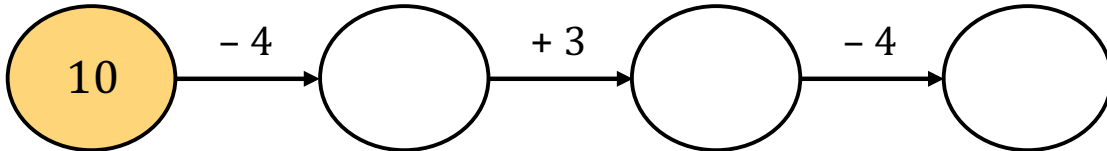
1 Løs minusstykkerne.

$20 - 12 = \underline{\quad\quad}$      $20 - 17 = \underline{\quad\quad}$


$20 - 15 = \underline{\quad\quad}$      $20 - 14 = \underline{\quad\quad}$      $20 - 19 = \underline{\quad\quad}$

$20 - 11 = \underline{\quad\quad}$      $20 - 16 = \underline{\quad\quad}$      $20 - 13 = \underline{\quad\quad}$

2 Løs talrækkerne.



3 Løs minusstykkerne og skriv dem efter størrelse. Det mindste først.



5				
---	--	--	--	--

