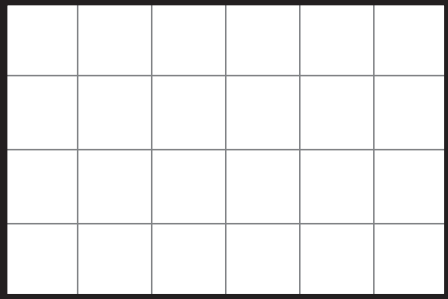
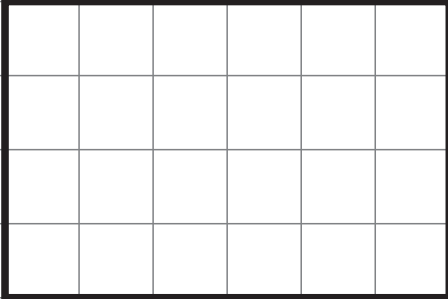
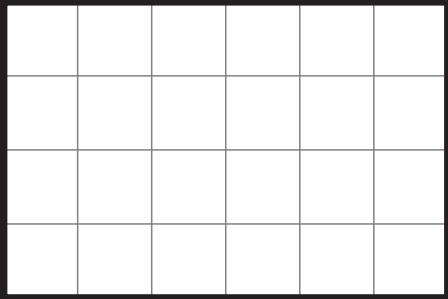
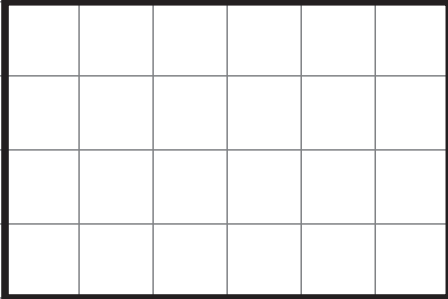
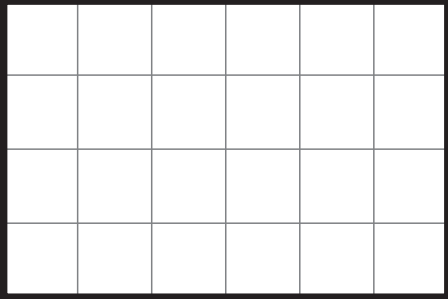
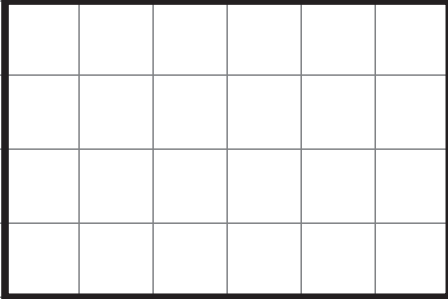
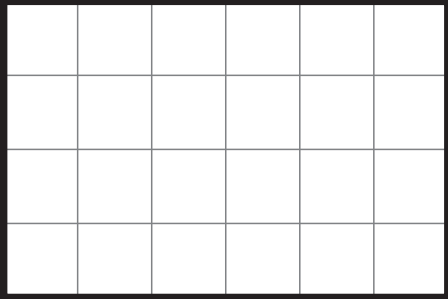
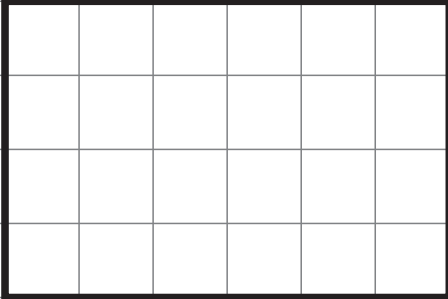


Tegn nogle figurer i kasserne, der passer med den omkreds og det areal, der er angivet i boksene til højre.

Prøv eventuelt med centicubes først.

## LÆR OM Areal og omkreds 3a MED MATTIP

	<b>6</b> AREAL		<b>6</b> AREAL
	<b>10</b> OMKREDS		<b>12</b> OMKREDS
	<b>7</b> AREAL		<b>10</b> AREAL
	<b>16</b> OMKREDS		<b>22</b> OMKREDS
	<b>5</b> AREAL		<b>7</b> AREAL
	<b>10</b> OMKREDS		<b>14</b> OMKREDS
	<b>3</b> AREAL		<b>8</b> AREAL
	<b>8</b> OMKREDS		<b>16</b> OMKREDS

