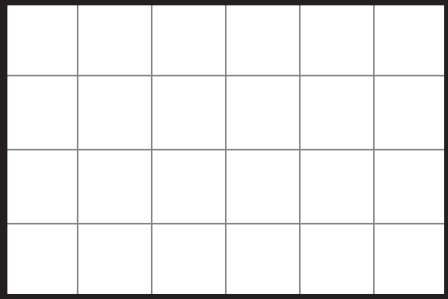
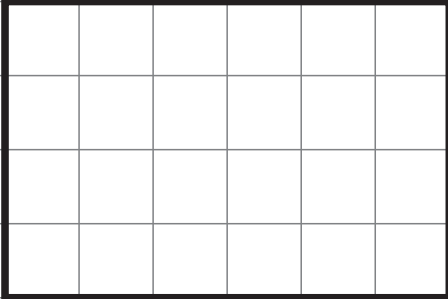
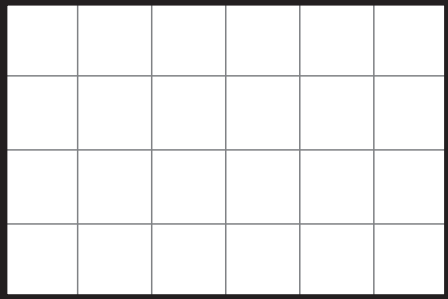
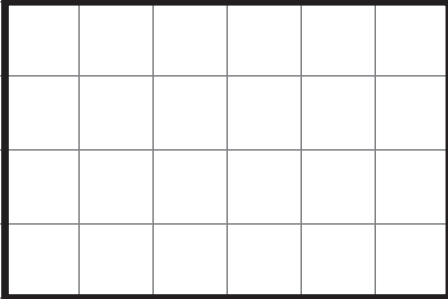
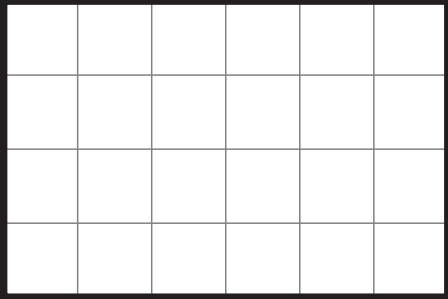
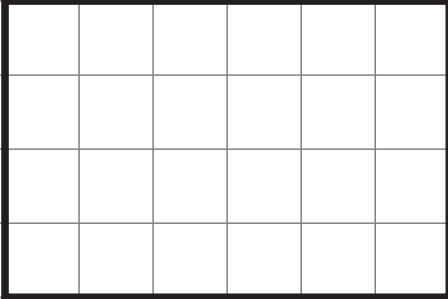
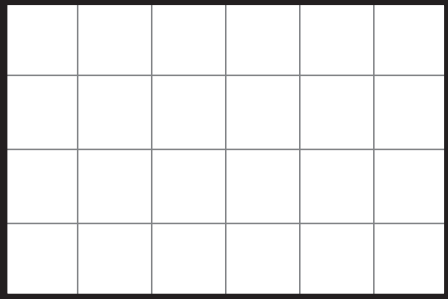
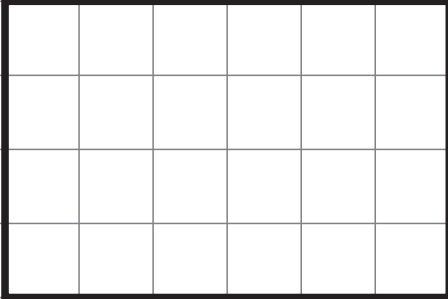


Tegn nogle forskellige figurer i kasserne og skriv, hvor stort arealet og omkredsen er i boksene til højre.

Prøv evt. at bygge figurer med centicubes.

LÆR OM
Areal og
omkreds 3b
MED MATTIP

| | | | |
|---|--------------------------------------|--|--------------------------------------|
|  | <input type="text" value="AREAL"/> |  | <input type="text" value="AREAL"/> |
| | <input type="text" value="OMKREDS"/> | | <input type="text" value="OMKREDS"/> |
|  | <input type="text" value="AREAL"/> |  | <input type="text" value="AREAL"/> |
| | <input type="text" value="OMKREDS"/> | | <input type="text" value="OMKREDS"/> |
|  | <input type="text" value="AREAL"/> |  | <input type="text" value="AREAL"/> |
| | <input type="text" value="OMKREDS"/> | | <input type="text" value="OMKREDS"/> |
|  | <input type="text" value="AREAL"/> |  | <input type="text" value="AREAL"/> |
| | <input type="text" value="OMKREDS"/> | | <input type="text" value="OMKREDS"/> |

