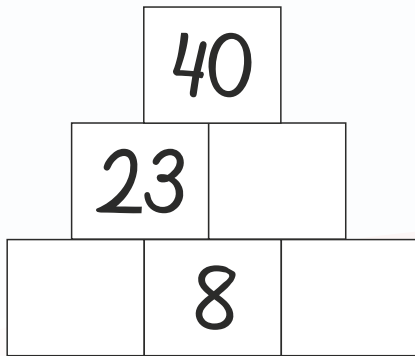


Navn: _____

1. Løs pluspyramiden.



2. Find tallet i midten.

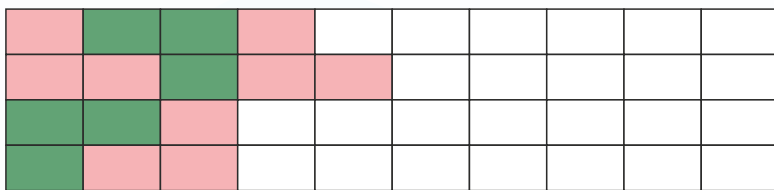


3. 247 cm = _____ meter

4. 12,5 cm = _____ mm

5. 1 meter = _____ mm

6. Fortsæt mønstret.

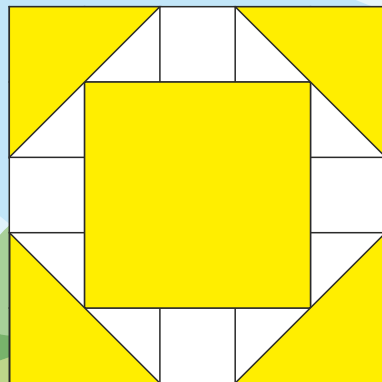


Hvad skal der stå, for at stykkerne passer?

7. $36 + \underline{\quad} = 85$

8. $\underline{\quad} - 41 = 39$

9. $\underline{\quad} \cdot 9 = 45$



10. Udfyld funktionen:

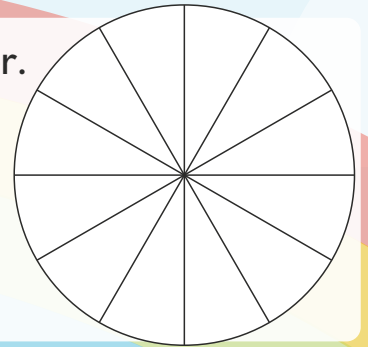
x	0	2	4	6	8
x+4					

11. Farv i forskellige farver.

$\frac{1}{3}$

$\frac{2}{6}$

$\frac{4}{12}$



12. Hvad er klokken?



:

13. $98 - 49 = \underline{\quad}$

14. $6 \cdot 6 = \underline{\quad}$

15. Hvad det samlede areal af de gule figurer?

= _____ cm²



Point